

Ch. 4 Review: SLOPE-INTERCEPT FORM

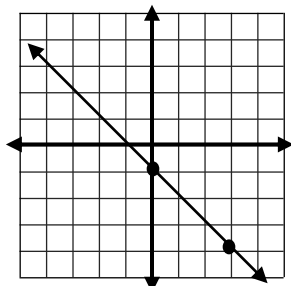
(8CP)

Name _____

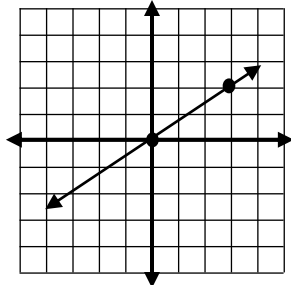
Write the equation of the line.

Graph the equation using m & b .

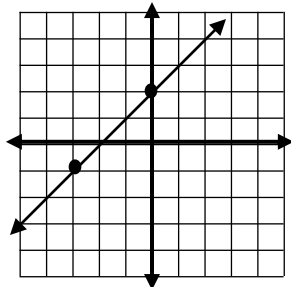
1.



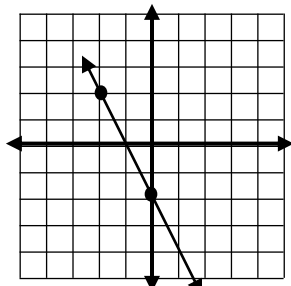
2.



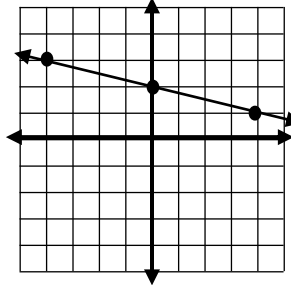
3.



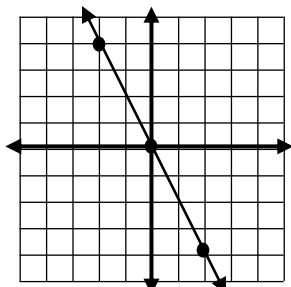
4.



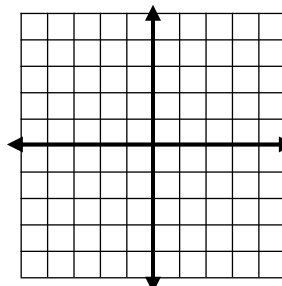
5.



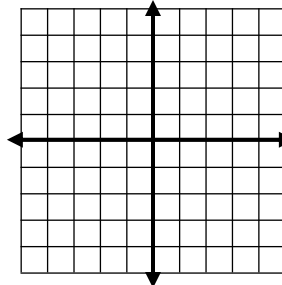
6.



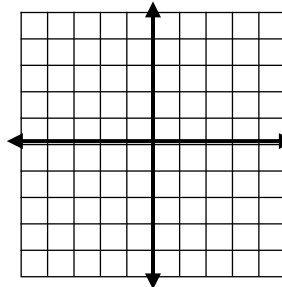
7. $y = 3x$



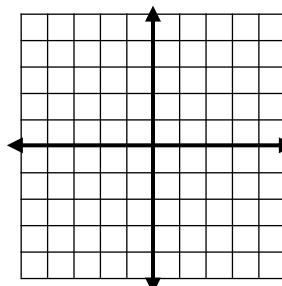
8. $y = -2x + 1$



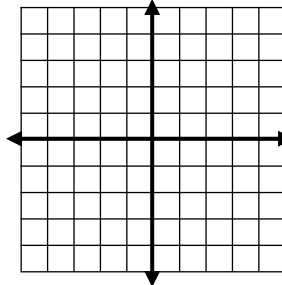
9. $y = \frac{1}{2}x - 3$



10. $y = -\frac{3}{4}x + 1$



11. $y = x - 4$



12. $y = -\frac{2}{3}x - 2$

